

Surname	Centre Number	Candidate Number
Other Names		2



GCE A level

1215/04

GEOLOGY – GL5

Thematic Unit 4

Geology of the Lithosphere

P.M. TUESDAY, 10 June 2014

ONE of TWO units to be completed in 2 hours

For Examiner's use only		
Question	Maximum Mark	Mark Awarded
Section A 1.	15	
Section B 2.	25	
3.		
4.		
Total	40	

1215
040001

ADDITIONAL MATERIALS

In addition to this and one other examination paper, you will need a calculator.

INSTRUCTIONS TO CANDIDATES

Use black ink or black ball-point pen.

Write your name, centre number and candidate number in the spaces at the top of this page.

Answer **question 1** in Section A (15 marks) and **one** question from Section B (25 marks).

INFORMATION FOR CANDIDATES

The number of marks is given in brackets at the end of each question or part-question.

You are reminded of the necessity for good English and orderly presentation in your answers.

SECTION A

1. **Figure 1a** shows the elevation above and the depth below sea level of the Earth's surface.

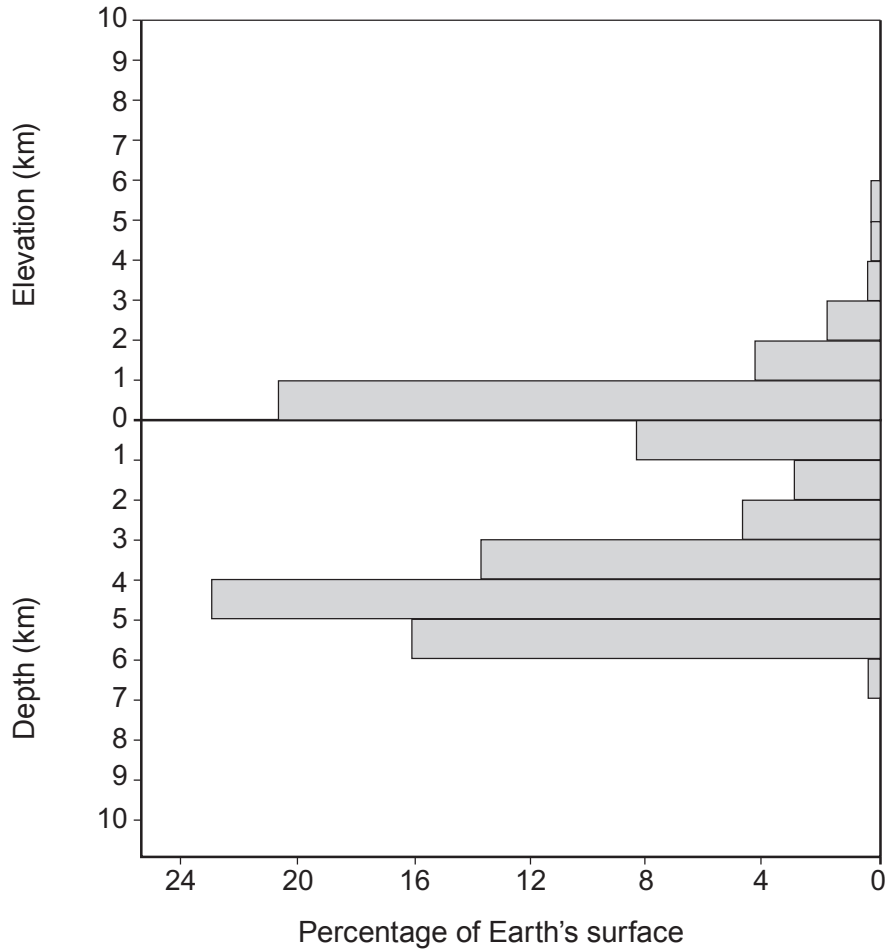


Figure 1a

(a) (i) Use **Figure 1a** to complete **Table 1**.

[2]

Percentage of the Earth's surface with an elevation between 0 and 1 km	%
Percentage of the Earth's surface with an elevation above 3 km	%

Table 1

(ii) Explain why the percentage of the Earth's surface with an elevation above 3 km is so small. [3]

.....

.....

.....

.....

Figure 1b shows the relationship between the elevation of the Earth's surface and the depth to the base of the crust.

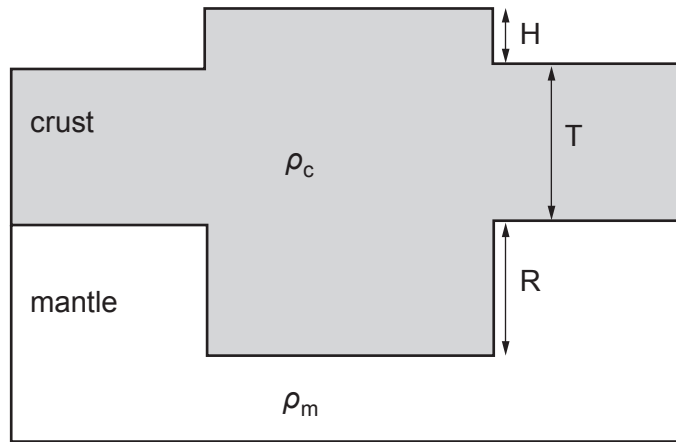


Figure 1b

- H = height of a mountain above sea level
(the height of Mount Everest is 8850 m)
- T = normal thickness of the crust
(the normal thickness of the crust in the Himalayan region is 40 km)
- R = thickness of the root of a mountain
- ρ_c = density of the crust, approximately 2700 kg m^{-3}
- ρ_m = density of the mantle, approximately 3300 kg m^{-3}

(b) Use the data from **Figure 1b**.

- (i) Calculate the thickness R of the root of Mount Everest in km. Show your working. [3]

R may be calculated using the formula: $R = \frac{H \times \rho_c}{\rho_m - \rho_c}$

..... km

- (ii) Calculate the thickness of the continental crust beneath the summit of Mount Everest in km. Show your working. [2]

..... km

- (c) In mountain belts with very thick continental crust, the high pressures and temperatures can result in the base of the crust recrystallising to form the rock eclogite. A possible consequence of this recrystallisation is a process called delamination, as shown in **Figure 1c**.

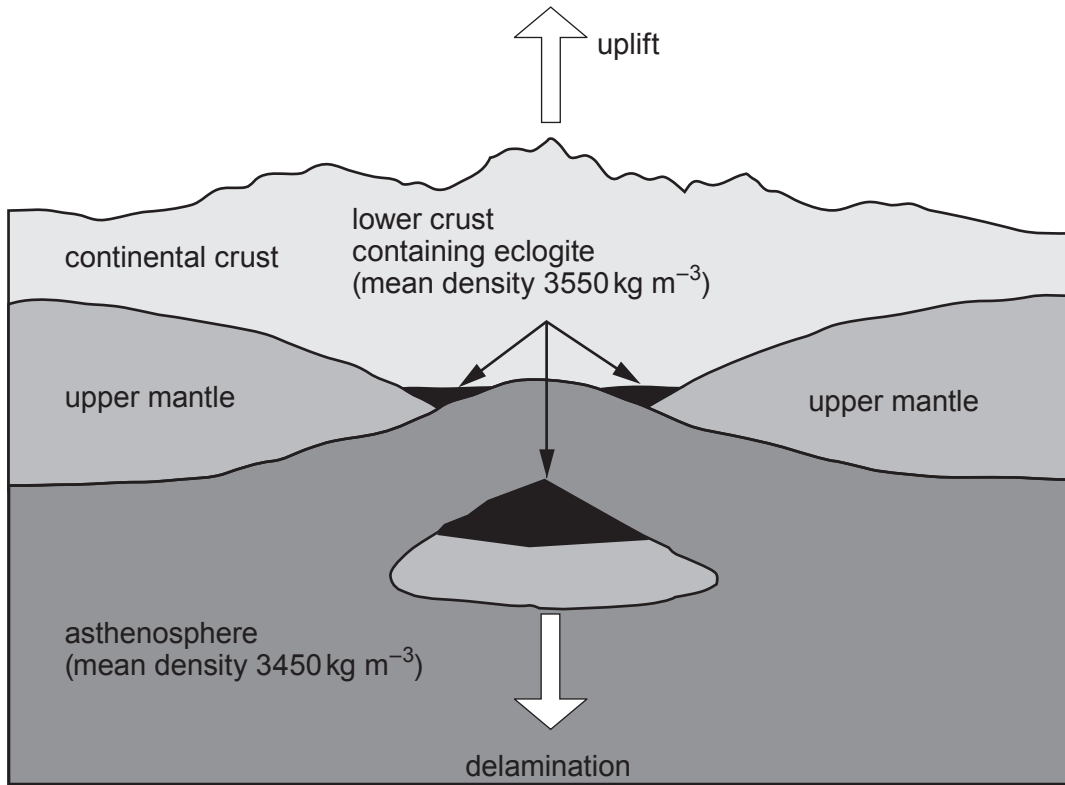


Figure 1c

- (i) Using **Figure 1c** explain how delamination can take place. [3]

.....

.....

.....

.....

- (ii) Use the information given in **Figures 1b** and **1c** to explain why mountains experience uplift when delamination occurs. [2]

.....

.....

.....

SECTION B

Answer one question only.

Write your answer in the remaining pages of this booklet.

2. Describe and evaluate the factors that influence the composition of the magma formed at
- constructive plate boundaries and
 - destructive (island arc and cordilleran) plate boundaries. [25]
3. Describe and evaluate the role that seismology has played in determining the
- structure and
 - composition of the lithosphere. [25]
4. (a) Describe and explain the pattern of surface heat flow across
- an active spreading centre and
 - an active ocean-continent subduction zone.
- (b) Evaluate the role that temperature has on the type of deformation a rock experiences. [25]

A series of horizontal dotted lines spanning the width of the page, intended for marking or grading.

Ruled area for examiner use, consisting of multiple horizontal dotted lines.

Examiner
only

Ruled area for writing, consisting of 30 horizontal dotted lines.

A large area of the page is filled with horizontal dotted lines, intended for student writing.

END OF PAPER

BLANK PAGE